


Name _____

Date _____

WALT: To solve number problems
using the 2, 5 and 10 times table.
Monday 11th January 2021




1) There were 5 knights who had 3 weapons each. How many weapons did they have altogether? _____

How many weapons would there be if they only had 2 weapons each? _____



2) 10 Lords live in a Castle. How many Lords would there be if there were 4 Castles? _____

How many Lords would there be if there were 8 Castles? _____



3) A Knight wears 6 pieces of armour. How many pieces of armour would there be altogether if there were 2 Knights? _____

How many pieces of armour would there be if there were 5 Knights? _____




4) There were 7 Kings who had 5 servants each. How many servants are there altogether? _____

How many servants would there be if there were only 4 Kings? _____

5) A Castle has 9 towers. How many towers would 2 Castles have? _____
How many towers would 10 Castles have? _____



6) A cook has to make food for 8 people. How many people would 2 cooks have to make food for? _____



7) There are 5 Knights who have 2 lances each. How many lances are there altogether? _____ What is double this number? _____



8) A Queen owns 10 gold coins. How many gold coins would 6 Queens own? _____

